

Name: \_\_\_\_\_

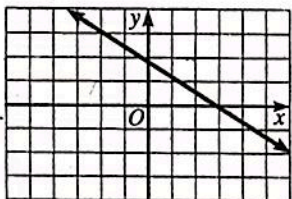
Date: \_\_\_\_\_

PC: Homework Writing Equations of Lines

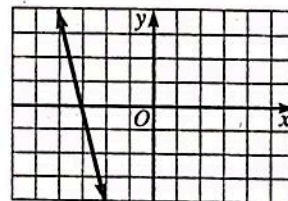
Ms. Loughran

Write the equation of the line from graph and also write domain and range. Find  $x$  and  $y$ -intercepts. Determine whether or not each is a function.

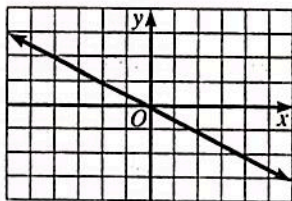
1.



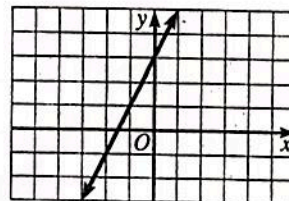
2.



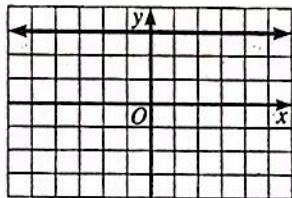
3.



4.



5.



6.

